

Die **MENGE** der
Zahl sechs

Überlege dir zu jeder Blume eine Aufgabe!




$$\square + \square = \square$$



$$\square + \square = \square$$




$$\square + \square = \square$$




$$\square - \square = \square$$

$$\square - \square = \square$$



$$\square - \square = \square$$



$$\square - \square = \square$$

$$\square + \square = \square$$



$$\square + \square = \square$$