















Rechnen mit Bildern...
















Versuche die Rechnungen zu lösen!
Gleiche Bilder bedeuten gleiche Ziffern!

		:		=	
-			X		+
		+		=	
=			=		=
				=	
					

Trage deine Lösung in die Kästchen ein:

<input type="text"/>	<input type="text"/>	:	<input type="text"/>	=	<input type="text"/>
-			X		+
<input type="text"/>	<input type="text"/>	+	<input type="text"/>	=	<input type="text"/>
=			=		=
<input type="text"/>	<input type="text"/>		<input type="text"/>	=	<input type="text"/>
			<input type="text"/>		<input type="text"/>

Rechnen mit Bildern...

		:		=	
+			×		+
		-		=	
=			=		
				=	
				=	

Trage deine Lösung in die Kästchen ein:

<input style="width: 60px; height: 60px;" type="text"/>	<input style="width: 60px; height: 60px;" type="text"/>	:	<input style="width: 60px; height: 60px;" type="text"/>	=	<input style="width: 60px; height: 60px;" type="text"/>
+			×		+
<input style="width: 60px; height: 60px;" type="text"/>	<input style="width: 60px; height: 60px;" type="text"/>	-	<input style="width: 60px; height: 60px;" type="text"/>	=	<input style="width: 60px; height: 60px;" type="text"/>
=			=		<input style="width: 60px; height: 60px;" type="text"/>
<input style="width: 60px; height: 60px;" type="text"/>	<input style="width: 60px; height: 60px;" type="text"/>		<input style="width: 60px; height: 60px;" type="text"/>	=	<input style="width: 60px; height: 60px;" type="text"/>
			<input style="width: 60px; height: 60px;" type="text"/>	=	<input style="width: 60px; height: 60px;" type="text"/>