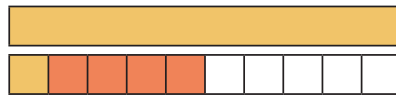


Zuzählen bis 20

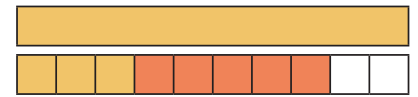
Ergänze die Rechensätze:



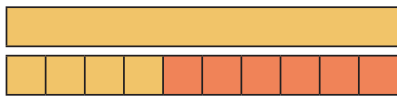
$$11 + 2 = 13$$



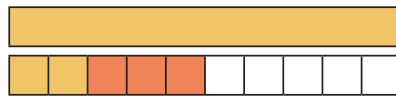
$$11 + 4 = 15$$



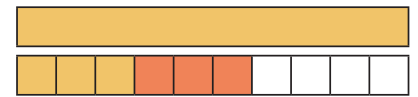
$$13 + 5 = 18$$



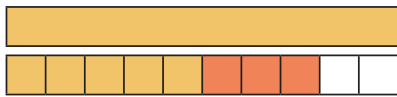
$$14 + 6 = 20$$



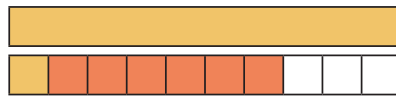
$$12 + 3 = 15$$



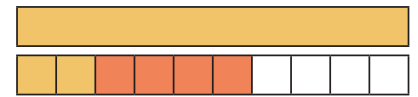
$$13 + 3 = 16$$



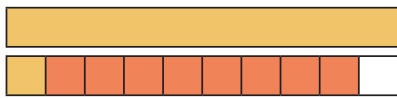
$$15 + 3 = 18$$



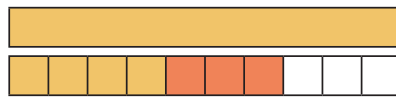
$$11 + 6 = 17$$



$$12 + 4 = 16$$



$$11 + 8 = 19$$




$$14 + 3 = 17$$



$$12 + 1 = 13$$

Löse die Rechenaufgaben:



$$11 + 1 = 12$$

$$13 + 5 = 18$$

$$18 + 2 = 20$$

$$11 + 2 = 13$$

$$14 + 4 = 18$$

$$14 + 6 = 20$$

$$13 + 4 = 17$$

$$19 + 1 = 20$$

$$14 + 2 = 16$$

$$16 + 1 = 17$$

$$17 + 3 = 20$$

$$17 + 1 = 18$$

$$15 + 5 = 20$$

$$15 + 1 = 16$$

$$11 + 5 = 16$$

$$12 + 2 = 14$$