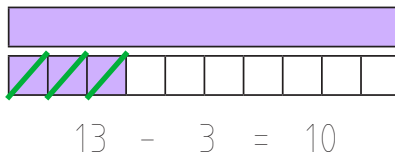
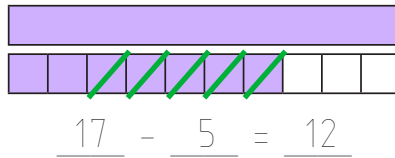
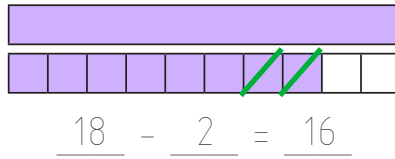
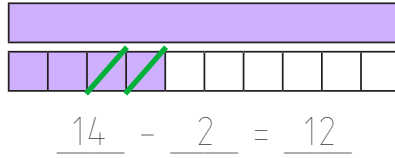
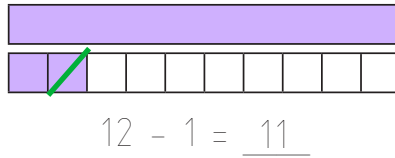
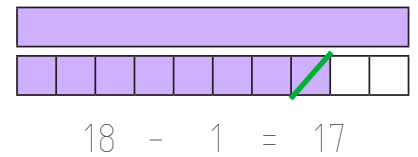
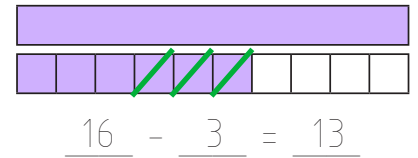
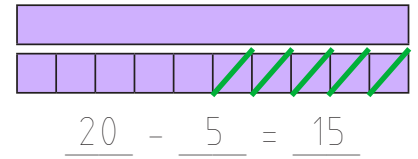
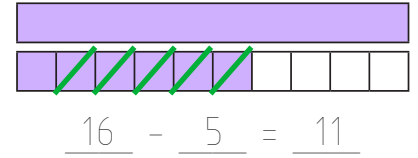
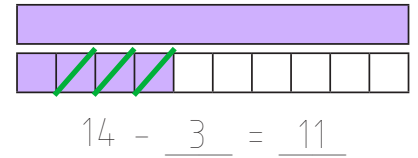




Schreibe die Rechensätzchen auf:



- 1
- 2
- 3
- 4
- 5
- 6
- 7
- 8
- 9
- 10
- 11
- 12
- 13
- 14
- 15
- 16
- 17
- 18
- 19
- 20



Rechne:

$$15 - 5 = 10$$

$$15 - 4 = 11$$

$$15 - 3 = 12$$

$$15 - 2 = 13$$

$$14 - 1 = 13$$

$$14 - 3 = 11$$

$$14 - 4 = 10$$

$$14 - 0 = 14$$

$$18 - 2 = 16$$

$$18 - 3 = 15$$

$$18 - 6 = 12$$

$$18 - 7 = 11$$

$$20 - 0 = 20$$

$$20 - 2 = 18$$

$$20 - 4 = 16$$

$$20 - 6 = 14$$