
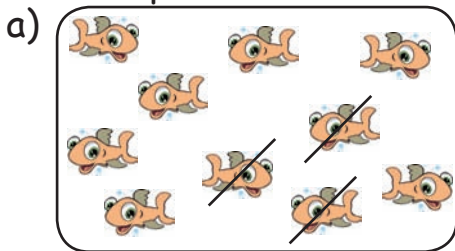


Von 10 nach 0

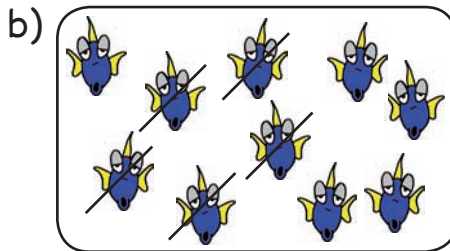


1.

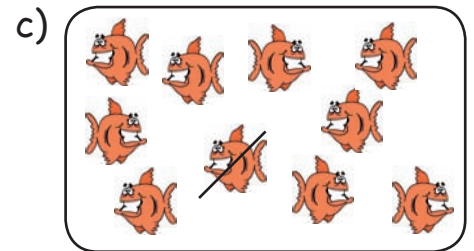
Beispiel:



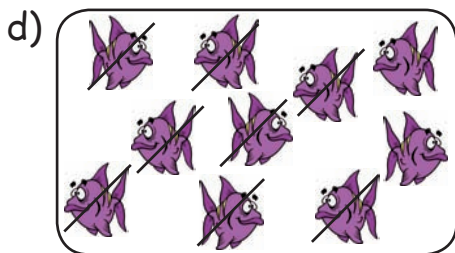
$$10 - \boxed{3} = 7$$



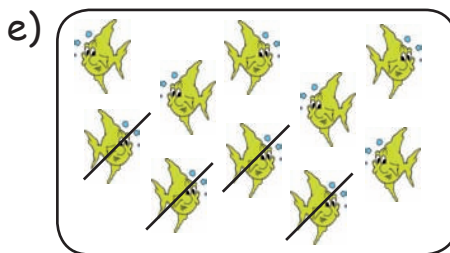
$$10 - \boxed{5} = 5$$



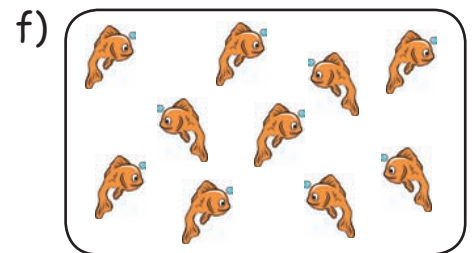
$$10 - \boxed{1} = 9$$



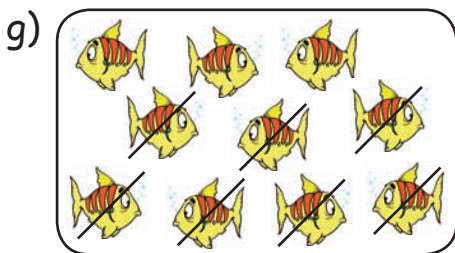
$$10 - \boxed{8} = 2$$



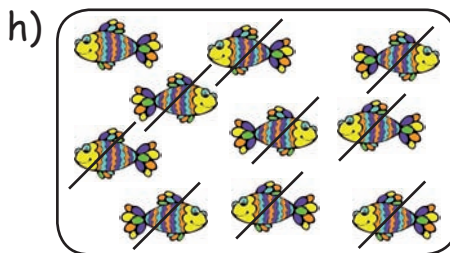
$$10 - \boxed{4} = 6$$



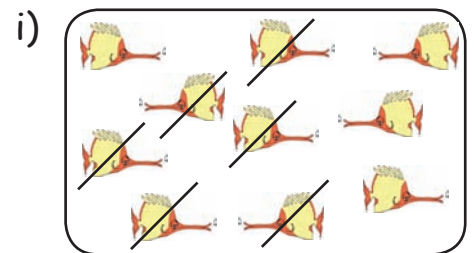
$$10 - \boxed{0} = 10$$



$$10 - \boxed{7} = 3$$



$$10 - \boxed{9} = 1$$



$$10 - \boxed{6} = 4$$

2. Setze die fehlenden Zahlen in die Kästchen ein.

- | | | | |
|-------------------------|------------------------|------------------------|------------------------|
| a) $6 = \boxed{8} - 2$ | e) $7 = 9 - \boxed{2}$ | i) $\boxed{5} = 8 - 3$ | m) $5 = \boxed{7} - 2$ |
| b) $4 = \boxed{6} - 2$ | f) $5 = 6 - \boxed{1}$ | j) $\boxed{4} = 9 - 5$ | n) $2 = \boxed{9} - 7$ |
| c) $1 = \boxed{5} - 4$ | g) $6 = 9 - \boxed{3}$ | k) $\boxed{0} = 1 - 1$ | o) $1 = \boxed{2} - 1$ |
| d) $9 = \boxed{10} - 1$ | h) $3 = 7 - \boxed{4}$ | l) $\boxed{6} = 6 - 0$ | p) $3 = \boxed{6} - 3$ |